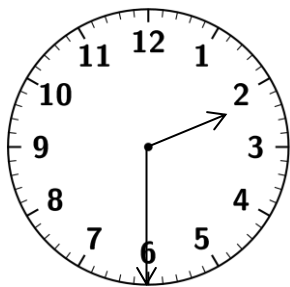


No.41

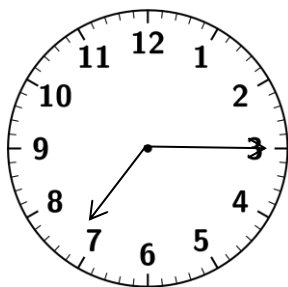
1ねん くみ ばん

なまえ

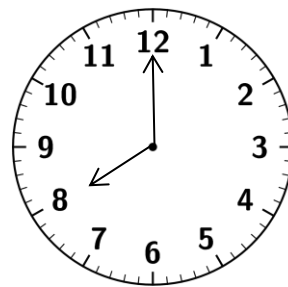
* とけいを よみましょう。



2じはん(2じ30ぷん)

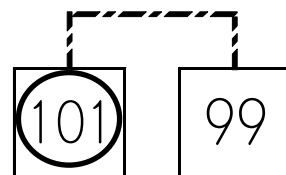
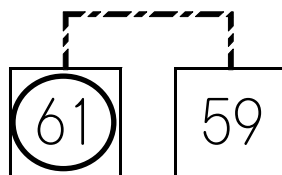




7じ15ぷん



8じ

* 大きい ほうに ○を つけましょう。



* けいさんを しましょう。

① $3 - 1 + 4 = 6$

② $3 + 4 - 5 = 2$

③ $7 - 5 + 3 = 5$

④ $5 + 3 - 6 = 2$

⑤ $9 - 4 + 2 = 7$

⑥ $2 + 7 - 4 = 5$

⑦ $10 - 5 + 3 = 8$

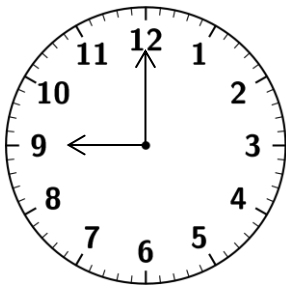
⑧ $7 + 3 - 6 = 4$

⑨ $10 - 8 + 4 = 6$

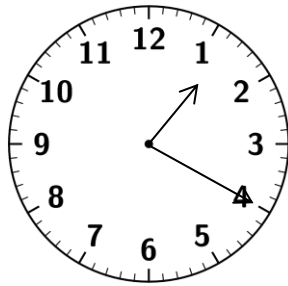
⑩ $4 + 6 - 8 = 2$

なまえ

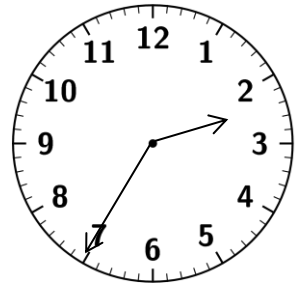
* とけいを よみましょう。



9じ







1じ20ふん



2じ35ふん

* 大きい ほうに ○を つけましょう。



* けいさんを しましょう。

① $9 - 5 + 2 = 6$

② $4 + 5 - 6 = 3$

③ $5 - 1 + 4 = 8$

④ $6 + 2 - 3 = 5$

⑤ $8 - 3 + 2 = 7$

⑥ $1 + 7 - 4 = 4$

⑦ $10 - 6 + 4 = 8$

⑧ $2 + 8 - 3 = 7$

⑨ $10 - 9 + 7 = 8$

⑩ $4 + 6 - 5 = 5$